

4. Convert one pint and two quarts into cups.


5. Convert eighteen cups into fewer units by converting into larger units whenever you can.

6. Convert eleven cups, four pints, and four quarts into fewer units by converting into larger units whenever you can.

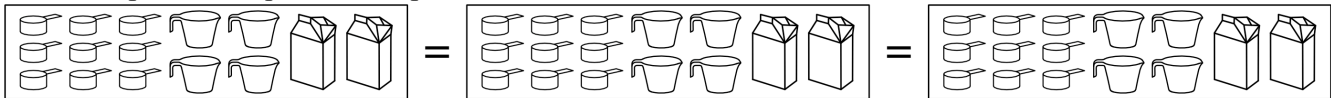
Planning Conversion Homework

As on yesterday's homework, fill in the units you have at each step, and circle the units that you will be pouring off into other units. Under the pictures, write in the math sentence describing those steps.

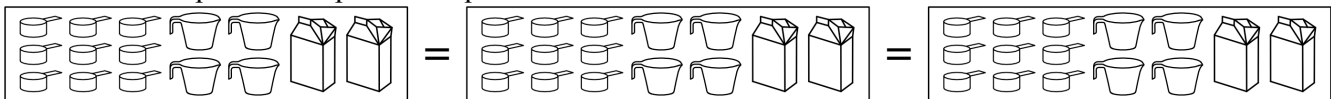
1. Convert two cups and a quart into pints.



2. Convert a pint and a quart into cups.



3. Convert four cups and two pints into quarts.



4. Circle the = sign that is incorrect in this math sentence.

$$\begin{aligned} 1 \text{ gallons} + 2 \text{ quarts} + 3 \text{ pints} &= 1 \text{ gallon} + 7 \text{ pints} = 4 \text{ quarts} + 7 \text{ pints} \\ &= 4 \text{ quarts} + 14 \text{ cups} = 2 \text{ pints} + 14 \text{ cups} = 18 \text{ cups} \end{aligned}$$